

NAME \_\_\_\_\_

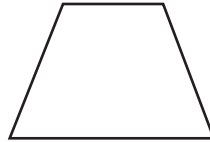
DATE \_\_\_\_\_



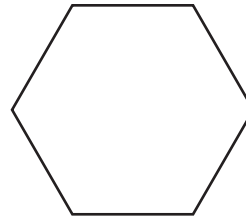
## Shape Riddles & More page 1 of 2




Large Rectangle



Large Trapezoid



Large Hexagon



Large Circle




Small Rectangle



Small Trapezoid



Small Hexagon



Small Circle

- 1** Read each set of clues to figure out which shape it will be. Draw the correct shape in the box.

<p><b>Clues:</b></p> <p>My shape has fewer than 6 sides.</p> <p>My shape has more than 3 sides.</p> <p>My shape is large.</p> <p>My shape has 2 slanted sides.</p>	<p><b>Draw the shape.</b></p>
<p><b>Clues:</b></p> <p>My shape has fewer than 6 sides.</p> <p>My shape is small.</p> <p>My shape does not have 4 sides.</p> <p>My shape does not have any straight sides.</p>	<p><b>Draw the shape.</b></p>

(continued on next page)


NAME \_\_\_\_\_

| DATE \_\_\_\_\_




**Shape Riddles & More** page 2 of 2

- 2** Tim has 12 fish. Seven are yellow and the rest are red. How many red fish does Tim have? Show your work.

Tim has \_\_\_\_\_ red fish.



- 3** **CHALLENGE** Make a picture that is worth 36¢. You can only use these shapes. Label your picture. Prove that it is worth 36¢.


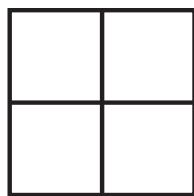

Square – 5¢ 	Circle – 4¢ 	Triangle – 3¢ 
--	--	--

NAME \_\_\_\_\_

DATE \_\_\_\_\_

**Shapes, Fractions & Stories** page 1 of 2

**1** Color half of each shape below.



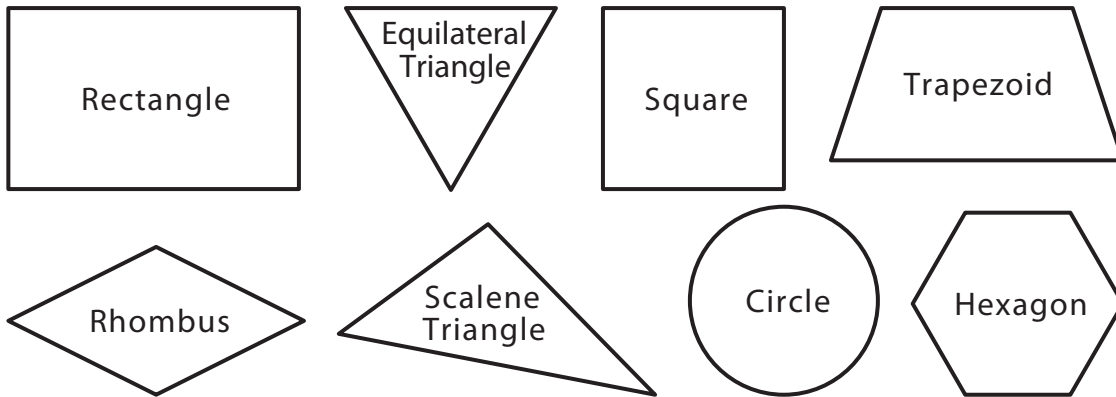
**2** Solve the problems. Use the space to show your work.

- a** Luis and his sister Elisa like to count cars as they go by their house. Luis counted 10 yesterday and Elisa counted 7 today. How many cars did they count in all?
- b** Breanna saved 16 dimes. She spent 5 of them on stickers. How many dimes does she have left?
- c** Amira read for 11 minutes after school, 5 minutes after dinner, and another 4 minutes before she fell asleep. How many minutes did she read today?

*(continued on next page)*

NAME \_\_\_\_\_

DATE \_\_\_\_\_

**Shapes, Fractions & Stories** page 2 of 2

**3** Solve the riddles below. Write the name of the shape in each box.

<p>My shape has 4 corners. My shape has 4 equal sides. My shape is not a square.</p> <p>Can you guess my shape?</p> <p>It is a _____.</p>	<p>My shape has 3 sides. My shape has 3 corners. Each of its sides is a different length.</p> <p>Can you guess my shape?</p> <p>It is a _____.</p>
<p>My shape does not have 4 corners. My shape does not have 3 sides. My shape has no straight sides.</p> <p>Can you guess my shape?</p> <p>It is a _____.</p>	<p>My shape has more than 3 sides. My shape has more than 4 sides. My shape has 6 corners.</p> <p>Can you guess my shape?</p> <p>It is a _____.</p>